



Geography

All Around the World



Top and Bottom

twinkl

Aim

- I can describe the key features of the polar regions and compare them to the UK.

Success Criteria

- I can find the North and South Poles on a globe or map.
- I can identify the Arctic Circle on a globe or map.
- I can identify the Antarctic Circle on a globe or map.
- I can compare daylight hours in the UK and polar regions.

Can You Remember...?



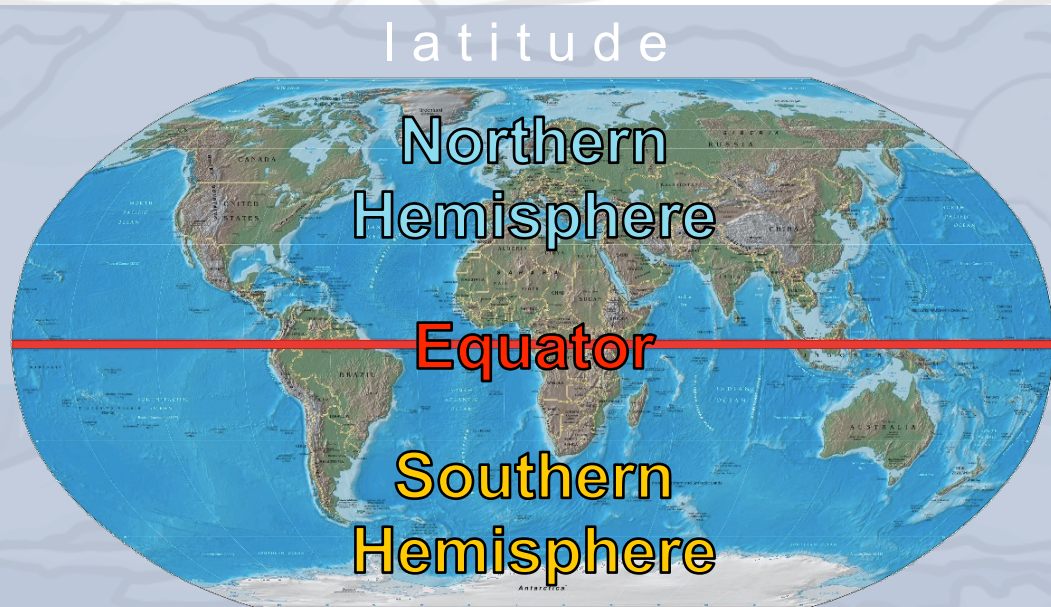
What is that **red** line?

What is the half **above** it called?

What about the part **below** the red line?

What are the **white** lines called?

l
o
n
g
i
t
u
d
e



These lines help us to find a place on the Earth's surface

Pole to Pole

The North Pole is located in the Arctic Circle - a circle at latitude 66°N .

The South Pole is located in the Antarctic Circle - a circle at latitude 66°S .

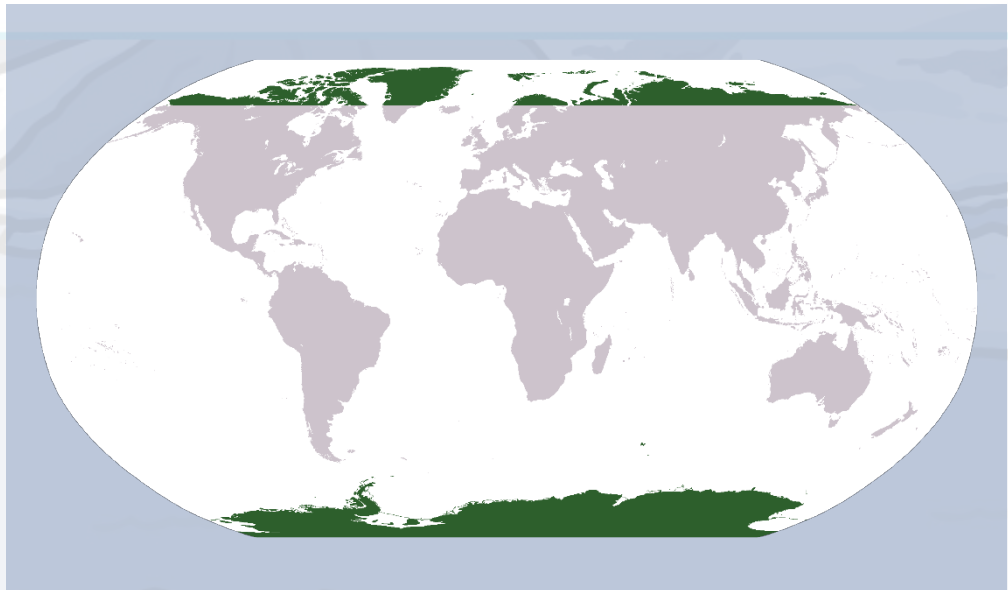
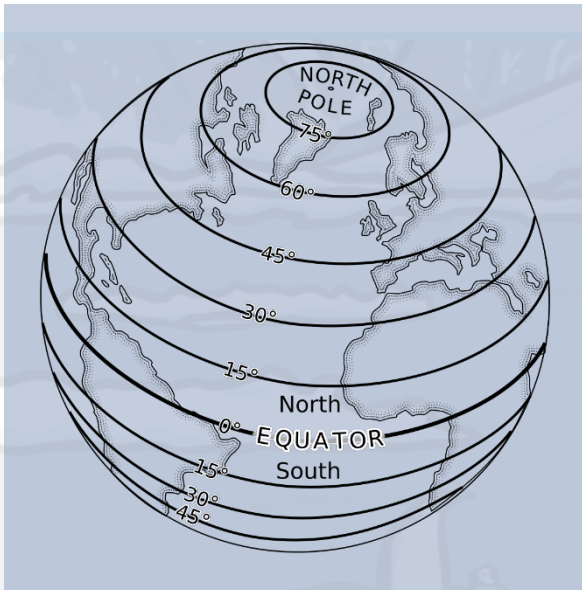


Photo courtesy of Pearson Scott Foresman, Wikimedia Commons - granted under creative commons licence - attribution

What is the Arctic Circle?



Which countries are inside the Arctic Circle?

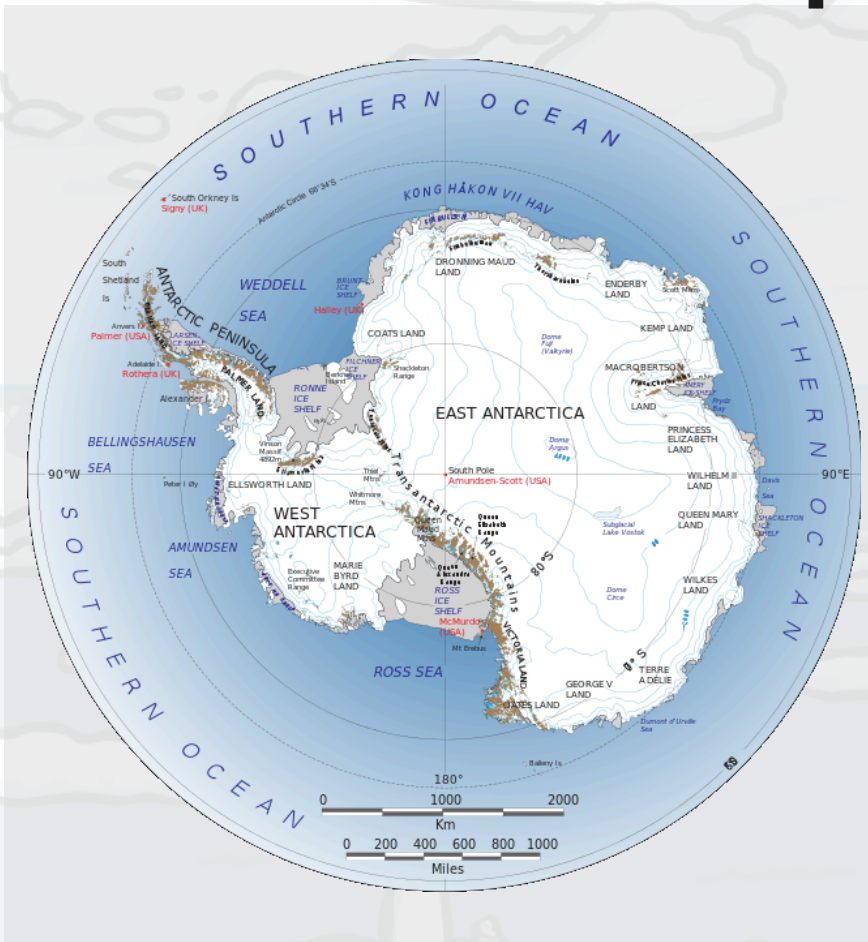


- Norway
- Sweden
- Finland
- Russia
- United States of America (Alaska)
- Canada
- Greenland
- Iceland

What would the weather be like here in July and December?

What animals might you see here?

What Makes Antarctica Unique?



Antarctica is a continent but it contains no countries.

It is not owned by any one country.

The global community have agreed it should be an area of peace and science. The environment is protected, with mining and military activities banned.

Around 3500 people stay here every year as part of the scientific and environmental research teams.


No-one lives there permanently.

What Makes Antarctica Unique?



Start
quiz

Click on the button to play the quiz and find out what makes Antarctica unique.



Which fact surprises you the most?

What Is Life like in the Arctic and Antarctic?

The amount of daylight in the polar regions varies throughout the year.
But by how much...?



Photos courtesy of diana_robinson, NASA Goddard Photo and Video (@flickr.com) - granted under creative commons licence – attribution

What Is Life like in the Arctic and Antarctic?

Table Showing Daylight Hours in London, the Arctic Circle and Antarctica

	Jan	Feb	Mar	Apr	May	Jun	Jul	Aug	Sept	Oct	Nov	Dec
London	8	10	12	14	15	16	16	14	12	10	9	8
Arctic Circle	2	7	12	16	21	24	23	17	13	9	4	0
Antarctica	24	21	10	5	2	0	3	6	9	18	20	24

Would You Rather...?



...live in the Arctic?



...or the Antarctic?



Why?

Photo courtesy of SF Brit, The Aurora Hunter (@flickr.com) - granted under creative commons licence – attribution

Aim



- I can describe the key features of the polar regions and compare them to the UK.

Success Criteria

- I can find the North and South Poles on a globe or map.
- I can identify the Arctic Circle on a globe or map.
- I can identify the Antarctic Circle on a globe or map.
- I can compare daylight hours in the UK and polar regions.

