
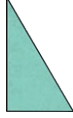




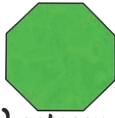
1)



Name: *(regular) hexagon*
Number of sides: 6




Name: *right-angled triangle*
Number of vertices: 3



Name: *(regular) octagon*
Property of your choice: *Accept any correct property, such as: 8 sides; 8 vertices; all sides the same length*

2)



I have 6 sides.

I have 5 vertices.

All my sides are the same length.

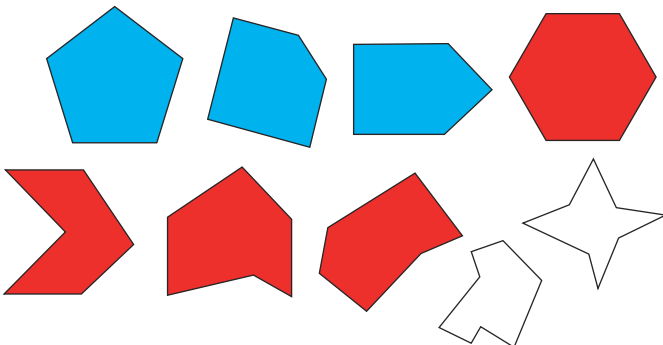
I am symmetrical.

1) *Accept any symmetrical triangle.*

2) *No. Answers should relate to parallelograms or some (irregular) quadrilaterals not being symmetrical.*



1)



Answers such as: *They have 8 sides and 8 vertices so they are octagons, not pentagons or hexagons.*

2) *Answers may include: one or more lines of symmetry, one or more obtuse angle, straight sides.*